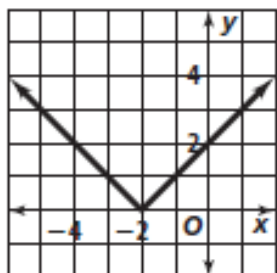


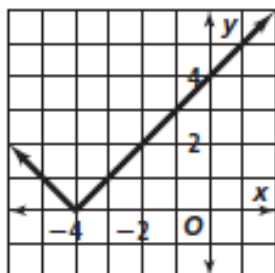
Chapter 2 Answers (continued)

Practice 2-6

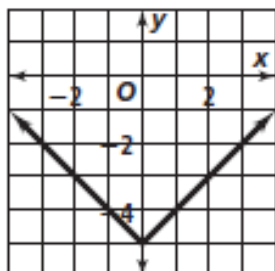
1. horizontal;



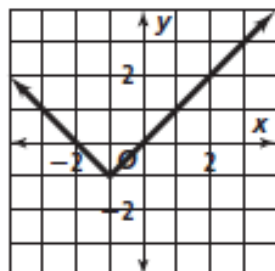
2. horizontal;



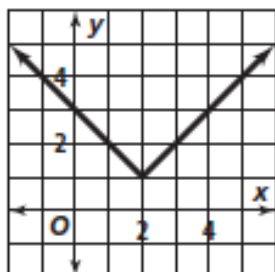
3. vertical;



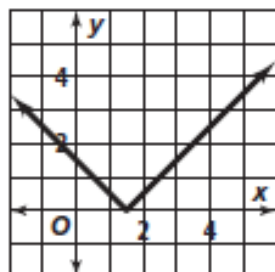
4. diagonal;



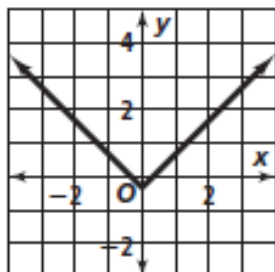
5. diagonal;



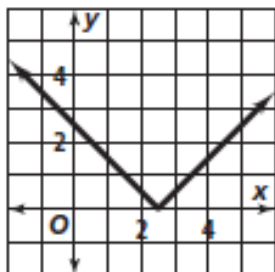
6. horizontal;



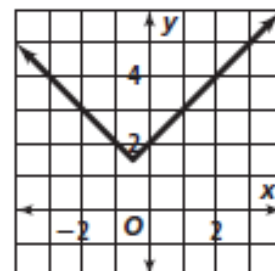
7. vertical;



8. horizontal;



9. diagonal;



10. $y = |x + 2| + 1$ 11. $y = |x - 4|$

12. $y = -|x - 1| + 3$ 13. $y = -\left|x - \frac{1}{2}\right| - \frac{3}{2}$

14. $y = |x + 3| - 2$ 15. $y = -|x| + \frac{3}{5}$

16. $y = |x + 2| + 1$ 17. $y = |x| - 3$ 18. $y = x + 2$

19. $h = 0; k = 2$ 20. $h = 1; k = -2$ 21. $h = -2; k = 0$

