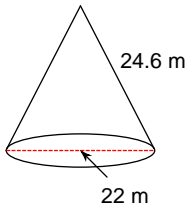


# Surface Area Classwork

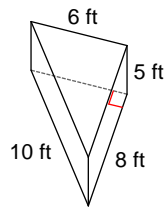
© 2016 Kuta Software LLC. All rights reserved.

**Find the surface area of each figure. Round your answers to the nearest tenth, if necessary.**

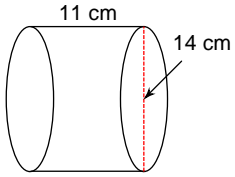
1)



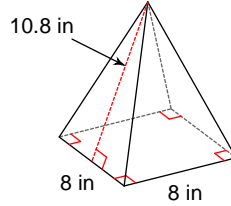
2)



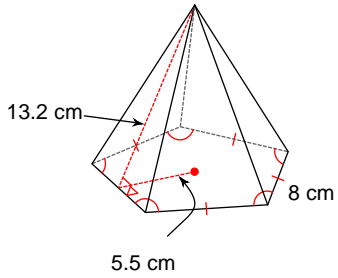
3)



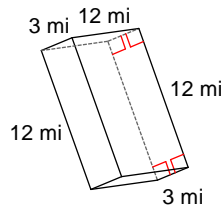
4)



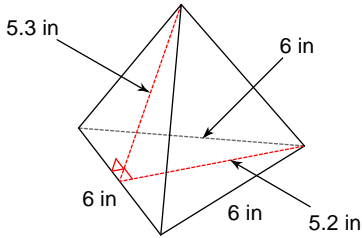
5)



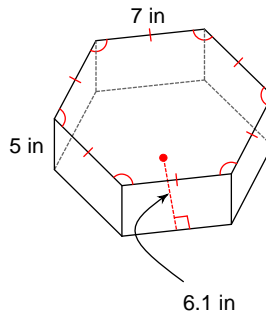
6)



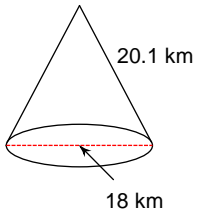
7)



8)



9)



10)

